

AP Physics Free Response Practice – Fluids

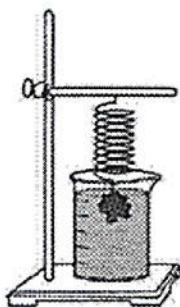
2002B6.

In the laboratory, you are given a cylindrical beaker containing a fluid and you are asked to determine the density ρ of the fluid. You are to use a spring of negligible mass and unknown spring constant k attached to a stand. An irregularly shaped object of known mass m and density D ($D \gg \rho$) hangs from the spring. You may also choose from among the following items to complete the task.

- A metric ruler
- A stopwatch
- String

(a) Explain how you could experimentally determine the spring constant k .

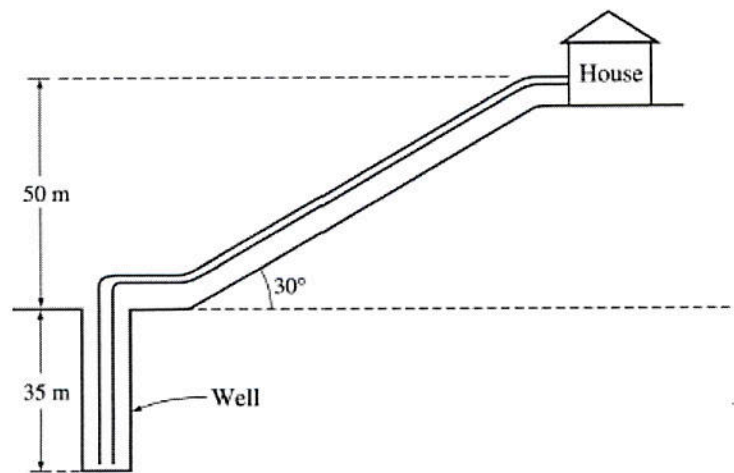
(b) The spring-object system is now arranged so that the object (but none of the spring) is immersed in the unknown fluid, as shown. Describe any changes that are observed in the spring-object system and explain why they occur.



(c) Explain how you could experimentally determine the density of the fluid.

(d) Show explicitly, using equations, how you will use your measurements to calculate the fluid density ρ . Start by identifying any symbols you use in your equations.

Symbol	Physical quantity



B2003B6.

A pump, submerged at the bottom of a well that is 35 m deep, is used to pump water uphill to a house that is 50 m above the top of the well, as shown above. The density of water is $1,000 \text{ kg/m}^3$. Neglect the effects of friction, turbulence, and viscosity.

- (a) Residents of the house use 0.35 m^3 of water per day. The day's pumping is completed in 2 hours during the day.
 - i. Calculate the minimum work required to pump the water used per day
 - ii. Calculate the minimum power rating of the pump.
- (b) In the well, the water flows at 0.50 m/s and the pipe has a diameter of 3.0 cm. At the house the diameter of the pipe is 1.25 cm.
 - i. Calculate the flow velocity at the house when a faucet in the house is open.
 - ii. Calculate the pressure at the well when the faucet in the house is open.

2003B6.

A diver descends from a salvage ship to the ocean floor at a depth of 35 m below the surface. The density of ocean water is $1.025 \times 10^3 \text{ kg/m}^3$.

- (a) Calculate the gauge pressure on the diver on the ocean floor.
- (b) Calculate the absolute pressure on the diver on the ocean floor.

The diver finds a rectangular aluminum plate having dimensions $1.0 \text{ m} \times 2.0 \text{ m} \times 0.03 \text{ m}$. A hoisting cable is lowered from the ship and the diver connects it to the plate. The density of aluminum is $2.7 \times 10^3 \text{ kg/m}^3$. Ignore the effects of viscosity.

- (c) Calculate the tension in the cable if it lifts the plate upward at a slow, constant velocity.
- (d) Will the tension in the hoisting cable increase, decrease, or remain the same if the plate accelerates upward at 0.05 m/s^2 ?

_____ increase _____ decrease _____ remain the same

Explain your reasoning.

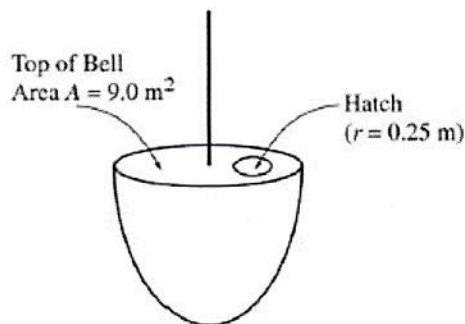
2004B2.

While exploring a sunken ocean liner, the principal researcher found the absolute pressure on the robot observation submarine at the level of the ship to be about 413 atmospheres. The inside of the submarine is kept at atmospheric pressure. The density of seawater is 1025 kg/m^3 .

- (a) Calculate the gauge pressure on the sunken ocean liner.
- (b) Calculate the depth of the sunken ocean liner.
- (c) Calculate the magnitude of the net force due to the fluid pressures only on a viewing port of the submarine at this depth if the viewing port has a surface area of 0.0100 m^2 .
- (d) What prevents the 'net force' found in part c from accelerating and moving the viewing port.

Suppose that the ocean liner came to rest at the surface of the ocean before it started to sink. Due to the resistance of the seawater, the sinking ocean liner then reached a terminal velocity of 10.0 m/s after falling for 30.0 s .

- (e) Determine the magnitude of the average acceleration of the ocean liner during this period of time.
- (f) Assuming the acceleration was constant, calculate the distance d below the surface at which the ocean liner reached this terminal velocity.
- (g) Calculate the time t it took the ocean liner to sink from the surface to the bottom of the ocean.



B2004B2.

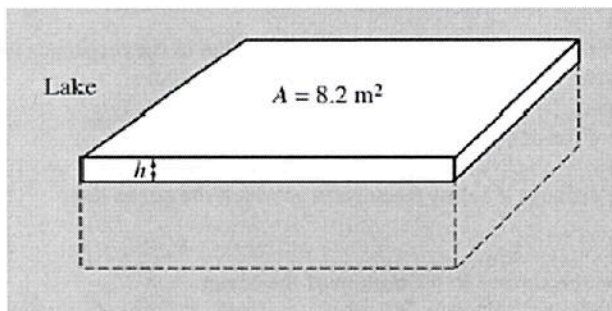
The experimental diving bell shown above is lowered from rest at the ocean's surface and reaches a maximum depth of 80 m. Initially it accelerates downward at a rate of 0.10 m/s^2 until it reaches a speed of 2.0 m/s , which then remains constant. During the descent, the pressure inside the bell remains constant at 1 atmosphere. The top of the bell has a cross-sectional area $A = 9.0 \text{ m}^2$. The density of seawater is 1025 kg/m^3 .

- Calculate the total time it takes the bell to reach the maximum depth of 80 m.
- Calculate the weight of the water on the top of the bell when it is at the maximum depth.
- Calculate the absolute pressure on the top of the bell at the maximum depth.

On the top of the bell there is a circular hatch of radius $r = 0.25 \text{ m}$.

- Calculate the minimum force necessary to lift open the hatch of the bell at the maximum depth.
- What could you do to reduce the force necessary to open the hatch at this depth? Justify your answer.

2005B5.



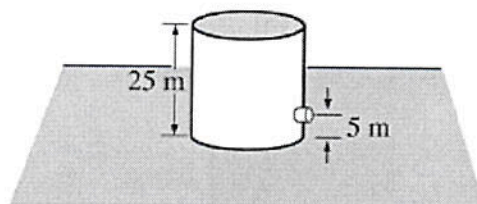
Note: Figure not drawn to scale.

A large rectangular raft (density 650 kg/m^3) is floating on a lake. The surface area of the top of the raft is 8.2 m^2 and its volume is 1.80 m^3 . The density of the lake water is 1000 kg/m^3 .

- Calculate the height h of the portion of the raft that is above the surrounding water.
- Calculate the magnitude of the buoyant force on the raft and state its direction.
- If the average mass of a person is 75 kg , calculate the maximum number of people that can be on the raft without the top of the raft sinking below the surface of the water. (Assume that the people are evenly distributed on the raft.)

B2005B5.

A large tank, 25 m in height and open at the top, is completely filled with saltwater (density 1025 kg/m^3). A small drain plug with a cross-sectional area of $4.0 \times 10^{-5} \text{ m}^2$ is located 5.0 m from the bottom of the tank.



The plug breaks loose from the tank, and water flows from the drain.

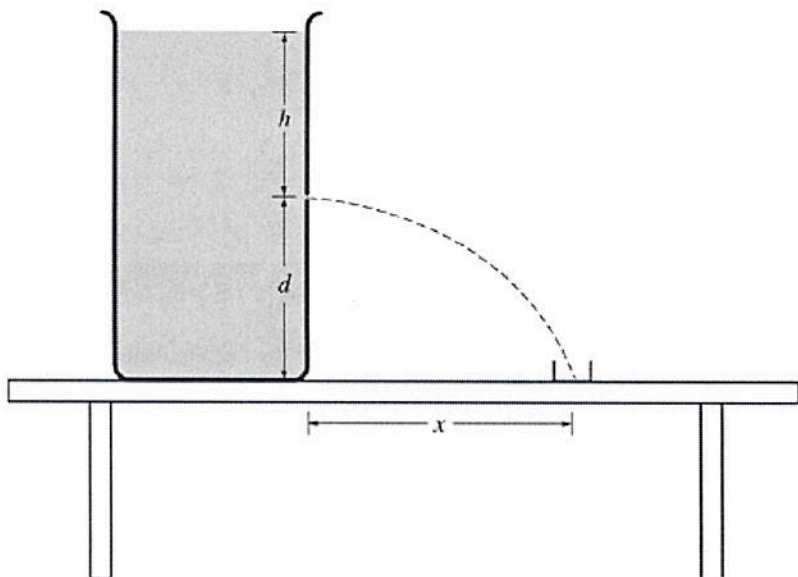
- Calculate the force exerted by the water on the plug before the plug breaks free.
- Calculate the speed of the water as it leaves the hole in the side of the tank.
- Calculate the volume flow rate of the water from the hole.

2007B4.

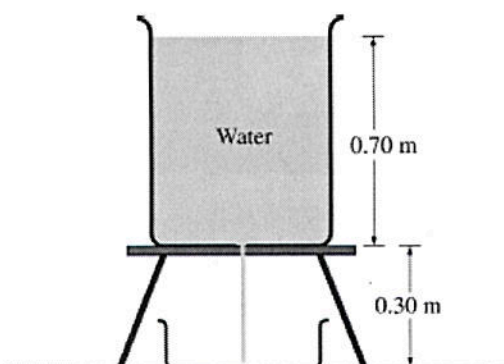
The large container shown in the cross section is filled with a liquid of density $1.1 \times 10^3 \text{ kg/m}^3$. A small hole of area $2.5 \times 10^{-6} \text{ m}^2$ is opened in the side of the container a distance h below the liquid surface, which allows a stream of liquid to flow through the hole and into a beaker placed to the right of the container. At the same time, liquid is also added to the container at an appropriate rate so that h remains constant. The amount of liquid collected in the beaker in 2.0 minutes is $7.2 \times 10^{-4} \text{ m}^3$.

- Calculate the volume rate of flow of liquid from the hole in m^3/s .
- Calculate the speed of the liquid as it exits from the hole.
- Calculate the height h of liquid needed above the hole to cause the speed you determined in part (b).
- Suppose that there is now less liquid in the container so that the height h is reduced to $h/2$. In relation to the collection beaker, where will the liquid hit the tabletop?

____ Left of the beaker ____ In the beaker ____ Right of the beaker
Justify your answer.



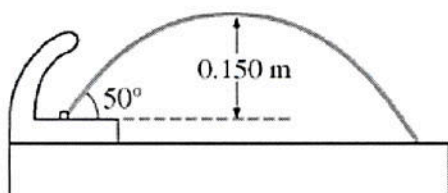
B2007B4.



A cylindrical tank containing water of density 1000 kg/m^3 is filled to a height of 0.70 m and placed on a stand as shown in the cross section above. A hole of radius 0.0010 m in the bottom of the tank is opened. Water then flows through the hole and through an opening in the stand and is collected in a tray 0.30 m below the hole. At the same time, water is added to the tank at an appropriate rate so that the water level in the tank remains constant.

- (a) Calculate the speed at which the water flows out from the hole.
 - (b) Calculate the volume rate at which water flows out from the hole.
 - (c) Calculate the volume of water collected in the tray in $t = 2.0$ minutes.
 - (d) Calculate the time it takes for a given droplet of water to fall 0.25 m from the hole.
-

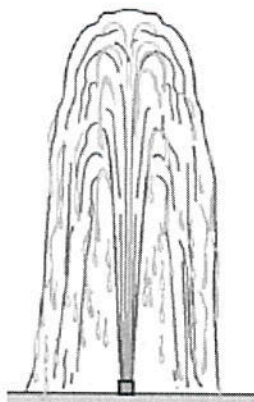
2008B4.



A drinking fountain projects water at an initial angle of 50° above the horizontal, and the water reaches a maximum height of 0.150 m above the point of exit. Assume air resistance is negligible.

- (a) Calculate the speed at which the water leaves the fountain.
- (b) The radius of the fountain's exit hole is $4.00 \times 10^{-3} \text{ m}$. Calculate the volume rate of flow of the water.
- (c) The fountain is fed by a pipe that at one point has a radius of $7.00 \times 10^{-3} \text{ m}$ and is 3.00 m below the fountain's opening. The density of water is $1.0 \times 10^3 \text{ kg/m}^3$. Calculate the gauge pressure in the feeder pipe at this point.

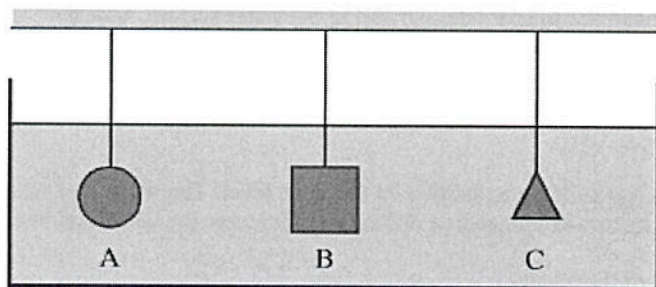
B2008B4.



A fountain with an opening of radius 0.015 m shoots a stream of water vertically from ground level at 6.0 m/s. The density of water is 1000 kg/m^3 .

- Calculate the volume rate of flow of water.
- The fountain is fed by a pipe that at one point has a radius of 0.025 m and is 2.5 m below the fountain's opening. Calculate the absolute pressure in the pipe at this point.
- The fountain owner wants to launch the water 4.0 m into the air with the same volume flow rate. A nozzle can be attached to change the size of the opening. Calculate the radius needed on this new nozzle.

2009B5.



Three objects of identical mass attached to strings are suspended in a large tank of liquid, as shown above.

- Must all three strings have the same tension?

____ Yes ____ No

Justify your answer.

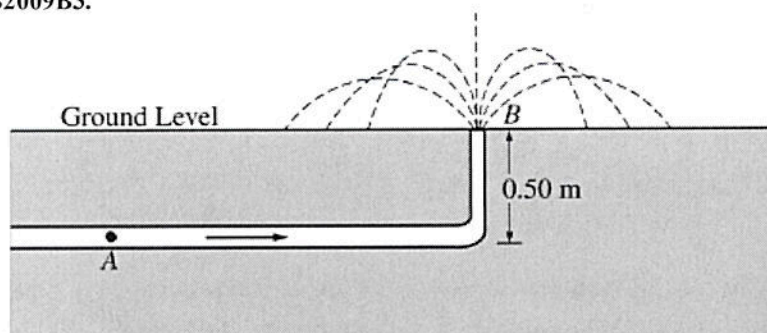
Object A has a volume of $1.0 \times 10^{-5} \text{ m}^3$ and a density of 1300 kg/m^3 . The tension in the string to which object A is attached is 0.0098 N.

- Calculate the buoyant force on object A.
- Calculate the density of the liquid.
- Some of the liquid is now drained from the tank until only half of the volume of object A is submerged. Would the tension in the string to which object A is attached increase, decrease, or remain the same?

____ Increase ____ Decrease ____ Remain the same

Justify your answer.

B2009B3.



An underground pipe carries water of density 1000 kg/m^3 to a fountain at ground level, as shown above. At point A , 0.50 m below ground level, the pipe has a cross-sectional area of $1.0 \times 10^{-4} \text{ m}^2$. At ground level, the pipe has a cross-sectional area of $0.50 \times 10^{-4} \text{ m}^2$. The water leaves the pipe at point B at a speed of 8.2 m/s .

- Calculate the speed of the water in the pipe at point A .
- Calculate the absolute water pressure in the pipe at point A .
- Calculate the maximum height above the ground that the water reaches upon leaving the pipe vertically at ground level, assuming air resistance is negligible.
- Calculate the horizontal distance from the pipe that is reached by water exiting the pipe at 60° from the level ground, assuming air resistance is negligible.

Supplemental Problems

SUP1. A block of wood has a mass of 12 kg and dimensions 0.5 m by 0.2 m by 0.2 m .

- Find the density ρ_o of the wooden block.
- If the block is placed in water ($\rho = 1000 \text{ kg/m}^3$) with the square sides parallel to the water surface, how far beneath the surface of the water is the bottom of the block?
- A weight is placed on the top of the block. The block sinks to a point that the top of the block is exactly even with the water surface. Find the mass of the added weight.

SUP2. A tapered horizontal pipe carries water from one building to another on the same level. The wider end has a cross-sectional area of 4 m^2 . The narrower end has a cross-sectional area of 2 m^2 . Water enters the wider end at a velocity of 10 m/sec .

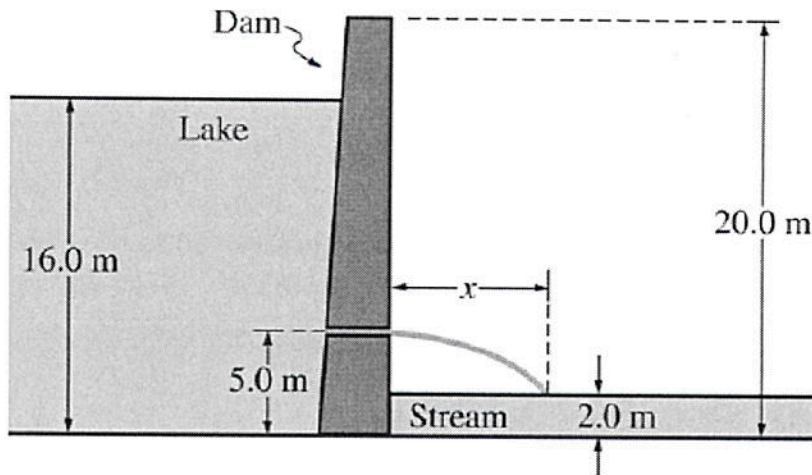
- What is the speed of the water at the narrow end of the pipe?
- The gauge pressure of the water at the wide end of the pipe is 2×10^5 pascals. Using Bernoulli's equation, find the gauge pressure at the narrow end of the pipe.

SUP3. A small airplane has wings with surface area 9 m^2 each. The speed of the air across the top of the wing is 50 m/sec , and across the bottom of the wing, 40 m/sec . Take the density of air to be 1.2 kg/m^3 .

- Find the difference in the pressure between the top and the bottom of the wing.
- Find the net lift upward on the plane.
 - If there is no other lift on the plane, what would be the mass of the plane? Assume the plane is not accelerating up or down.

SUP4. A block of wood floats in water, with $2/3$ of it submerged. The wood is then placed in oil, and $9/10$ of it is submerged. Find the density of the wood, and of the oil.

SUP5.



A 20 m high dam is used to create a large lake. The lake is filled to a depth of 16 m as shown above. The density of water is 1000 kg/m^3 .

(a) Calculate the absolute pressure at the bottom of the lake next to the dam.

A release valve is opened 5.0 m above the base of the dam, and water exits horizontally from the valve.

(b) Use Bernoulli's equation to calculate the initial speed of the water as it exits the valve.

(c) The stream below the surface of the dam is 2.0 m deep. Assuming that air resistance is negligible, calculate the horizontal distance x from the dam at which the water exiting the valve strikes the surface of the stream.

(d) Suppose that the atmospheric pressure in the vicinity of the dam increased. How would this affect the initial speed of the water as it exits the valve?

___ It would increase. ___ It would decrease. ___ It would remain the same.
Justify your answer.

